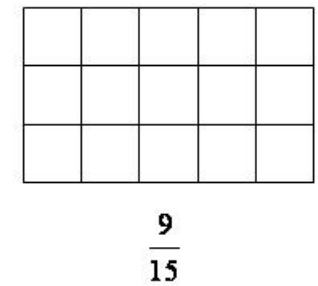
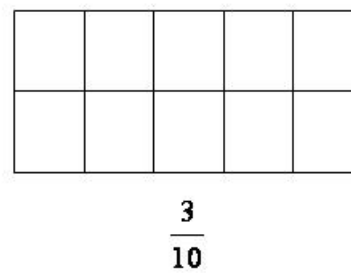
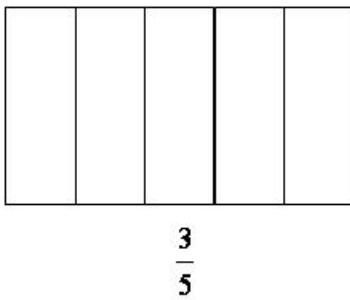
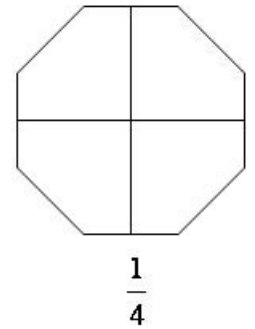
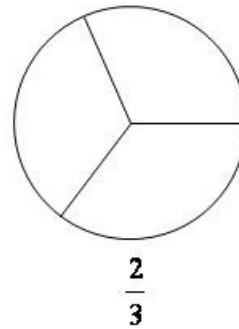
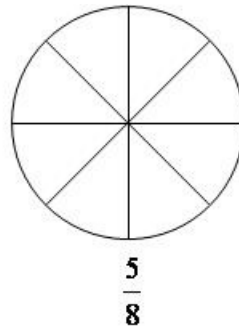
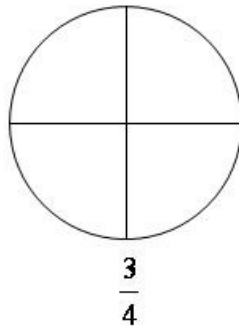
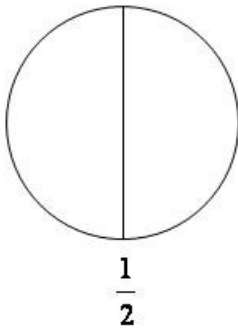


# Darstellen von Brüchen

*Bruchteile darstellen und bestimmen*

## Übung 1 – Bruchteile darstellen:

Stelle die folgenden Bruchteile durch Anmalen grafisch dar:



## Übung 2 – Bruchteile bestimmen:

Gib an, welcher Bruchteil jeweils angemalt ist:

