



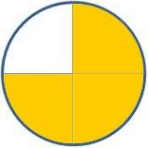
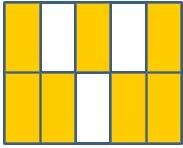





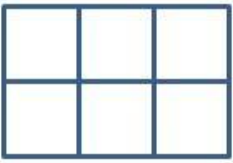




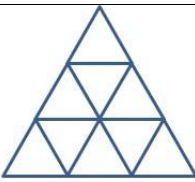









# Darstellen von Brüchen

*Bruchteile kennzeichnen + bestimmen*

<b>LEVEL 1</b>				
	$\frac{5}{8}$	$\frac{2}{5}$	$\frac{3}{4}$	$\frac{1}{6}$
				
	—	—	—	—
<b>LEVEL 2</b>				
	$\frac{1}{4}$	$\frac{3}{4}$	$\frac{4}{5}$	$\frac{1}{3}$
				
	— = —	— = —	— = —	— = —
<b>LEVEL 3</b>				
	$\frac{1}{3}$	$\frac{3}{4}$	$\frac{2}{3}$	$\frac{1}{16}$
				
	— = — = —	— = —	— = —	— = — = —